

Index
No.

--	--	--	--	--	--	--	--	--	--

 -

--

MINISTRY OF EDUCATION, SINGAPORE
PRIMARY SCHOOL LEAVING EXAMINATION

0008/1 (A)

PSLE
2020MATHEMATICS
PAPER 1
(BOOKLET A)

Additional materials: Optical Answer Sheet (OAS)

Total Time for Booklets A and B : 1 hour

INSTRUCTIONS TO CANDIDATES

1. Write your Index No. in the boxes at the top right hand corner.
2. Do not turn over this page until you are told to do so.
3. Follow all instructions carefully.
4. Answer all questions.
5. Shade your answers in the Optical Answer Sheet (OAS) provided.
6. The use of calculators is **NOT** allowed.

This booklet consists of 7 printed pages and 1 blank page.



Singapore Examinations and Assessment Board

Questions 1 to 10 carry 1 mark each. Questions 11 to 15 carry 2 marks each.
For each question, four options are given. One of them is the correct answer.
Make your choice (1, 2, 3 or 4) and shade your answer on the Optical Answer Sheet.

(20 marks)

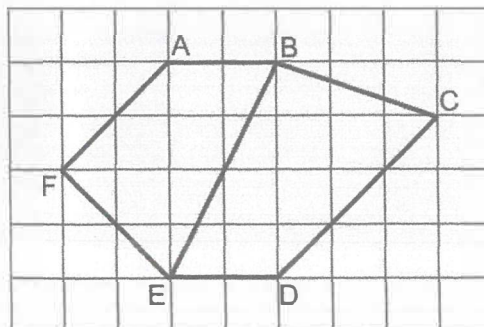
1 Which of the following is thirty-five thousand and twenty in numerals?

- (1) 3520
- (2) 35 020
- (3) 35 200
- (4) 350 020

2 Round 6.785 to 2 decimal places.

- (1) 6.70
- (2) 6.78
- (3) 6.79
- (4) 6.80

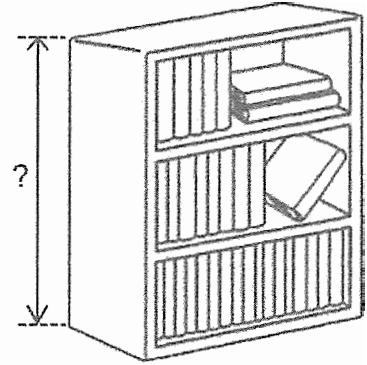
3 Which line in the square grid is parallel to AF?



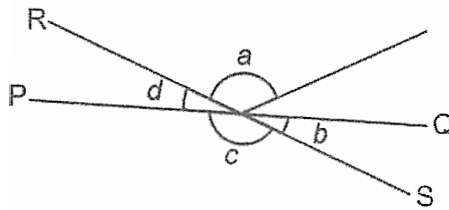
- (1) AB
- (2) BE
- (3) CD
- (4) EF

- 4 The diagram shows a bookshelf in a school library.
Which of the following could be the height of the bookshelf?

- (1) 1 cm
 (2) 5 cm
 (3) 1 m
 (4) 5 m



- 5 PQ and RS are straight lines.

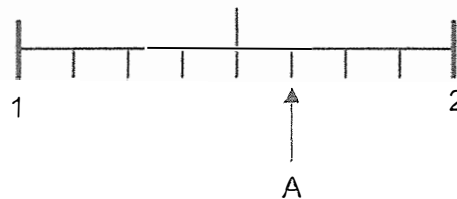


Which of the following is true?

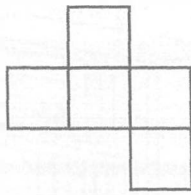
- (1) $\angle a = \angle c$
 (2) $\angle b = \angle d$
 (3) $\angle a + \angle d = 180^\circ$
 (4) $\angle a + \angle c = 180^\circ$

- 6 In the number line, what is the mixed number represented by A?

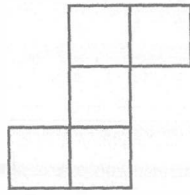
- (1) $1\frac{2}{3}$
 (2) $1\frac{3}{4}$
 (3) $1\frac{5}{7}$
 (4) $1\frac{5}{8}$



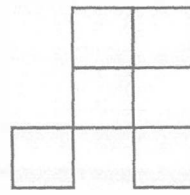
7 Each figure is made up of 5 identical squares. Which one has a line of symmetry?



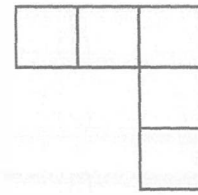
(1)



(2)

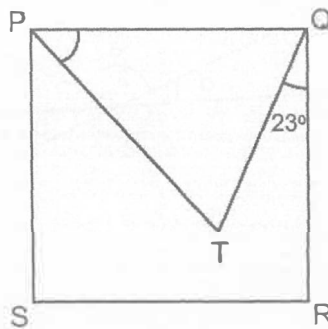


(3)



(4)

8 PQRS is a square and $PQ = PT$. Find $\angle TPQ$.



(1) 67°

(2) 60°

(3) 46°

(4) 45°

9 Mr Lim had \$50. After buying 4 identical ties, he had \$ x left. How much did Mr Lim pay for each tie?

(1) $\$(50 - 4x)$

(2) $\$(50 - \frac{x}{4})$

(3) $\$(\frac{50 - x}{4})$

(4) $\$(\frac{50x}{4})$

- 10 Arrange these distances from the shortest to the longest.

1.25 km	1 km 205 m	$1\frac{2}{5}$ km
---------	------------	-------------------

	<u>Shortest</u>		<u>Longest</u>
(1)	1 km 205 m	$1\frac{2}{5}$ km	1.25 km
(2)	1 km 205 m	1.25 km	$1\frac{2}{5}$ km
(3)	1.25 km	1 km 205 m	$1\frac{2}{5}$ km
(4)	$1\frac{2}{5}$ km	1.25 km	1 km 205 m

- 11 In the television guide shown, one programme leads to another without any break in between.

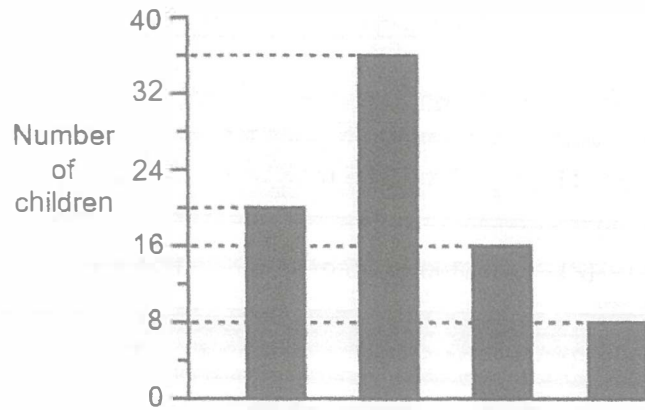
<u>Start Time</u>	<u>Programme</u>
9.00 a.m.	Cartoon
10.10 a.m.	Music
11.30 a.m.	Sports
12.20 p.m.	News

How much longer is the Music programme than the Sports programme?

- (1) 30 min
 (2) 50 min
 (3) 1 h 10 min
 (4) 1 h 20 min

- 12 A group of children was asked to choose one fruit from Apple, Mango, Orange and Pear. The table represents the children's choices. The children's choices were also represented by a bar graph but the names of the fruits were not shown.

Fruit	Percentage of children
Apple	10%
Mango	20%
Orange	25%
Pear	45%



What was the total number of children who chose Apple and Orange?

- (1) 28
- (2) 35
- (3) 36
- (4) 45

- 13 Figure 1 shows a rectangular tile with a perimeter of 14 cm. Figure 2 is formed using 5 such tiles.



Figure 1

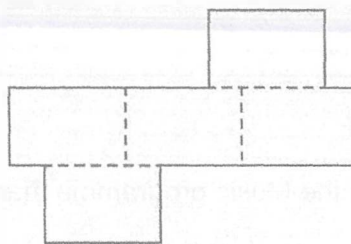


Figure 2

Find the perimeter of Figure 2.

- (1) 42 cm
- (2) 49 cm
- (3) 56 cm
- (4) 70 cm

- 14 A florist had some roses and tulips. She sold $\frac{1}{3}$ of the roses and $\frac{4}{9}$ of the tulips.

$\frac{7}{11}$ of the flowers sold were roses. What fraction of the flowers did the florist sell?

(1) $\frac{11}{21}$

(2) $\frac{11}{27}$

(3) $\frac{11}{30}$

(4) $\frac{11}{36}$

- 15 The pupils at a camp are divided into Group A and Group B. The ratio of the number of boys to girls in Group A is 5 : 4. The ratio of the number of boys to girls in Group B is 5 : 1. There are 3 times as many pupils in Group B as in Group A.

Which of the following could be the total number of boys in both groups?

(1) 17

(2) 30

(3) 40

(4) 55

BLANK PAGE

Copyright Acknowledgements:

The Singapore Examinations and Assessment Board has made every effort to trace copyright holders, but if we have inadvertently overlooked any, we will be pleased to make the necessary arrangements at the first opportunity.

Index No.

--	--	--	--	--

 -

--

 MINISTRY OF EDUCATION, SINGAPORE
 PRIMARY SCHOOL LEAVING EXAMINATION

0008/1 (B)
**PSLE
2020**
**MATHEMATICS
PAPER 1
(BOOKLET B)**

Total Time for Booklets A and B : 1 hour

INSTRUCTIONS TO CANDIDATES

1. Write your Index No. in the boxes at the top right hand corner.
2. Do not turn over this page until you are told to do so.
3. Follow all instructions carefully.
4. Answer all questions.
5. Write your answers in this booklet.
6. The use of calculators is **NOT** allowed.

FOR MARKERS' USE

Question No.	Marker ID	
	Marker 1	Marker 2
16 – 20		
21 – 23		
24 – 25		
26 – 27		
28 – 29		
30		

FOR CM / ACM / TL's USE

Supervisor ID / Signature

FOR RECORDER'S USE

Total Mark	Max Mark	Recorder ID / Signature
	25	



This booklet consists of 7 printed pages and 1 blank page.

Singapore Examinations and Assessment Board

Questions **16** to **20** carry 1 mark each. Write your answers in the spaces provided. For questions which require units, give your answers in the units stated. (5 marks)

Do not write in this space

16 Round 13 845 to the nearest hundred.

Ans: _____

17 Write down all the common multiples of 4 and 6 that are smaller than 30.

Ans: _____

18 Find the value of $\frac{3}{4} \div 15$


Give your answer as a fraction in the simplest form.

Ans: _____

19 Devi has \$10. She spends 95¢ on a bun and 60¢ on a drink. How much money does Devi have left?

Ans: \$ _____

20 The figure is made up of equilateral triangles. What fraction of the figure is shaded?



Ans: _____

Questions 21 to 30 carry 2 marks each. Show your working clearly and write your answers in the spaces provided. For questions which require units, give your answers in the units stated. (20 marks)

Do not write in this space

21 Find the value of each of the expressions when $m = 5$.

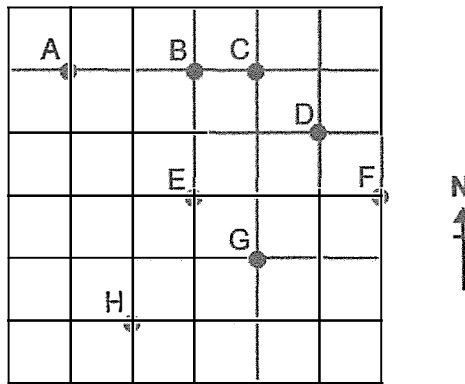
(a) $7m + 6$

(b) $2m - \frac{m}{9}$

Ans: (a) _____

(b) _____

22

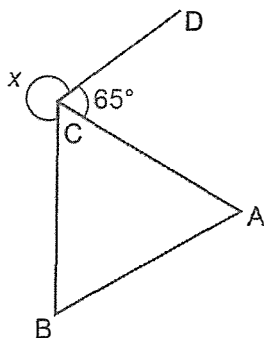


In the square grid,

(a) point _____ is west of point B.

(b) point D is north-east of point _____.

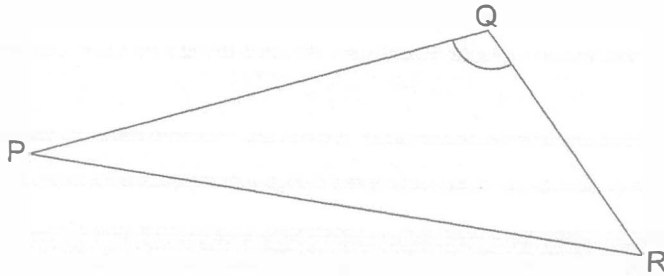
23 ABC is an equilateral triangle. Find $\angle x$.



Ans: _____ $^\circ$

24 Measure and write down

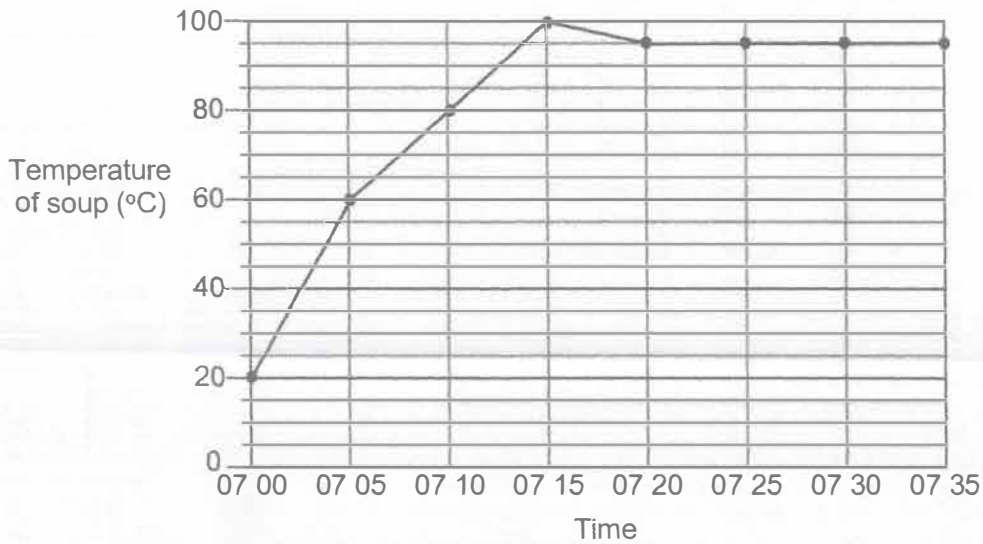
- (a) the length of PR to the nearest 0.1 cm.
 (b) the size of $\angle PQR$.



Ans: (a) _____ cm
 (b) _____ °

Do not write
 in this space

25 The line graph shows the temperature of soup in a pot from 07 00 to 07 35.




- (a) What was the temperature of the soup at 07 30?
 (b) What was the increase in temperature per minute over the first 5 minutes?

Ans: (a) _____ °C
 (b) _____ °C/min

26 What is the percentage discount for the bag shown?

Do not write
in this space



Ans: _____ %


27 The table shows the number of storybooks read by each pupil in a group. Part of the table is covered by an ink blot. There were 45 pupils who read at least 2 storybooks.

Number of storybooks	0	1	2	3	4
Number of pupils	7	8	20	[Ink blot]	

Each of the statements is either true, false or not possible to tell from the information given. For each statement, put a tick (✓) to indicate your answer.

Statement	True	False	Not possible to tell
7 pupils did not read any storybooks.			
There were 80 pupils in the group.			
The number of pupils who read 3 storybooks was equal to the number of pupils who read 4 storybooks.			

- 28 A roll of tape has stars and hearts printed in a repeated pattern.

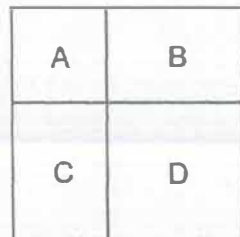


Mabel cuts a piece of tape from the roll. In that piece, there are 135 stars. Find the possible numbers of hearts on that piece of tape.

Ans: _____

Do not write
in this space

- 29 The figure shows a square divided into two smaller squares A and D and two rectangles B and C. The total perimeter of rectangles B and C is 48 cm. The area of square A is 25 cm^2 .

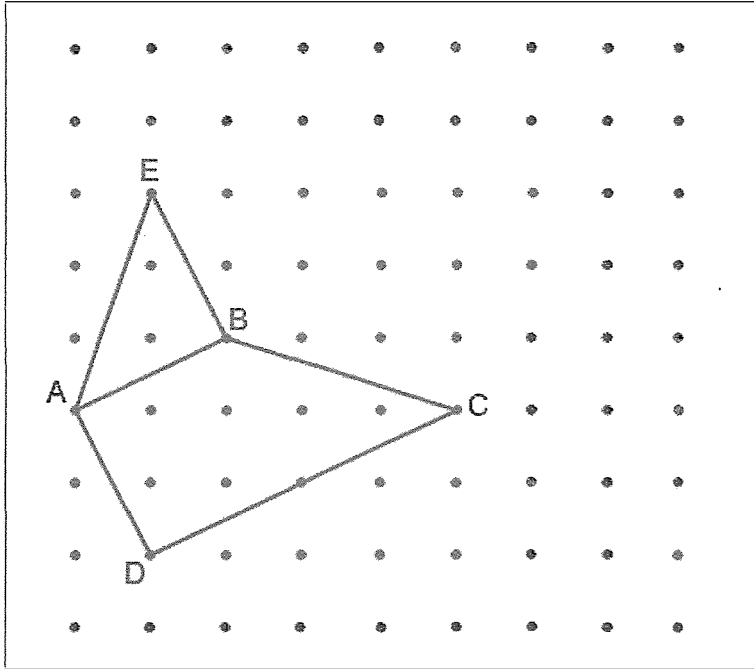


What is the area of square D?

Ans: _____ cm^2

- 30 A trapezium ABCD and a right-angled triangle ABE are drawn on a square grid inside a box.

Do not write in this space



By joining dots on the grid with straight lines,

- draw another trapezium ABCF such that AF is longer than BC.
- draw another triangle ABG such that it has the same area as triangle ABE. Triangle ABG must not overlap with trapezium ABCD.



Copyright Acknowledgements:

The Singapore Examinations and Assessment Board has made every effort to trace copyright holders, but if we have inadvertently overlooked any, we will be pleased to make the necessary arrangements at the first opportunity.

Index No.

--	--	--	--	--

 -

--

MINISTRY OF EDUCATION, SINGAPORE
 PRIMARY SCHOOL LEAVING EXAMINATION

0008/2 **PSLE**
2020

MATHEMATICS
PAPER 2

Time : 1 h 30 min

- INSTRUCTIONS TO CANDIDATES**
1. Write your Index No. in the boxes at the top right hand corner.
 2. Do not turn over this page until you are told to do so.
 3. Follow all instructions carefully.
 4. Answer all questions.
 5. Write your answers in this booklet.
 6. The use of an approved calculator is allowed.

FOR MARKERS' USE

Question No.	Marker ID	
	Marker 1	Marker 2
1		
2		
3		
4		
5		
6		
7		
8		
9		
10		
11		
12		
13		
14		
15		
16		
17		

FOR CM / ACM / TL's USE

Supervisor ID / Signature

FOR RECORDER'S USE

Total Mark	Max Mark	Recorder ID / Signature
	55	

Questions 1 to 5 carry 2 marks each. Show your working clearly and write your answers in the spaces provided. For questions which require units, give your answers in the units stated. (10 marks)

Do not write in this space

- 1 Use all the digits 2, 3, 5, 8 to form
- (a) the smallest multiple of 5
 - (b) the greatest number between 3000 and 4000

Ans: (a) _____
 (b) _____


- 2 The table shows the times taken by four boys to complete a race.

Name	Time in seconds
Dinesh	14.1
Ismail	15.0
Ming	13.8
Paul	13.9

- (a) Who was first in the race?
- (b) What was the average time taken by the 4 boys to complete the race?

Ans: (a) _____
 (b) _____ s

- 3 Matthew has a rope which is 64 cm long. He cuts it into three pieces. The lengths of the three pieces of rope are as shown. Find the value of u .



Ans: _____

- 4 Shanti took a taxi from home to her office.
Her taxi fare was based on the charges shown.


Do not write
in this space

First 1 km	\$3.20
Every additional 400 m or less	\$0.22
Every 45 seconds of waiting or less	\$0.22

The taxi stopped once at a traffic light for 1 min and travelled a total distance of 5.8 km to reach Shanti's office. How much was her taxi fare?

Ans: \$ _____

- 5 A square is first divided into two equal halves. The top half is divided into 5 equal parts while the bottom half is divided into 4 equal parts.



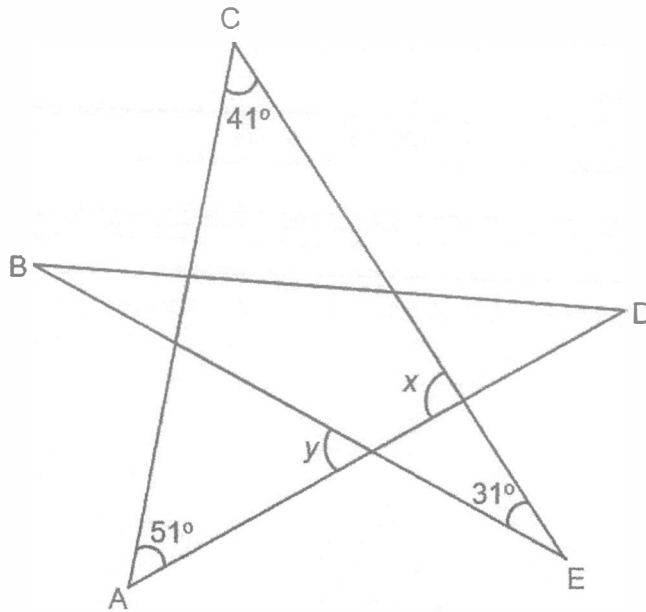
The total area of the shaded parts is 165 cm². What is the area of the square?

Ans: _____ cm²

For questions 6 to 17, show your working clearly and write your answers in the spaces provided. The number of marks available is shown in brackets [] at the end of each question or part-question. (45 marks)

Do not write in this space

6 The figure is formed by five straight lines AC, AD, BD, BE and CE.



- (a) Find $\angle x$.
- (b) Find $\angle y$.

Ans: (a) _____ [1]

(b) _____ [2]

- 7 Lucy had an equal number of gold stars and silver stars. She gave 26 gold stars and 14 silver stars to Maggie. She gave the remaining stars to Nick. Nick was given 1 gold star for every 3 silver stars. How many stars did Lucy have at first?

Do not write
in this space

Ans: _____ [3]

8 On Friday, the ratio of the number of adults to boys to girls visiting a zoo was $7 : 6 : 5$. On Saturday, the number of adults visiting the zoo remained the same. However, the number of boys increased by 50% and the number of girls decreased by 40%.

Do not write
in this space

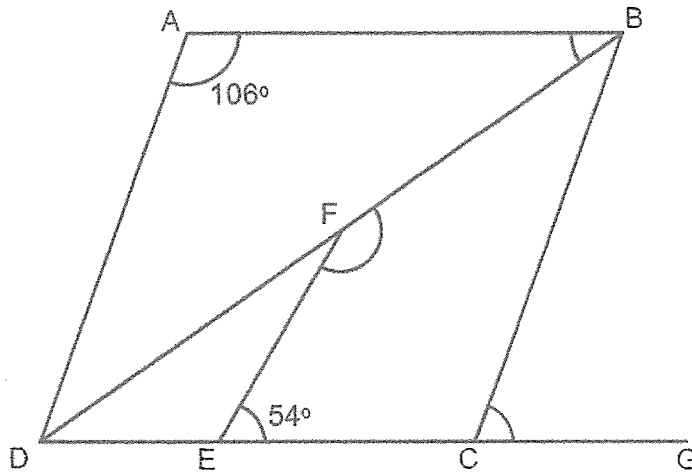
- (a) What was the ratio of the number of adults to boys to girls visiting the zoo on Saturday?
- (b) On Friday, 627 boys and girls visited the zoo. What was the total number of visitors at the zoo on Saturday?

Ans: (a) _____ [1]

(b) _____ [2]

- 9 ABCD is a rhombus. DFB and DECG are straight lines.

Do not write
in this space




- (a) Find $\angle ABD$.
 (b) Find $\angle GCB$.
 (c) Find $\angle EFB$.

Ans: (a) _____ [1]

(b) _____ [1]

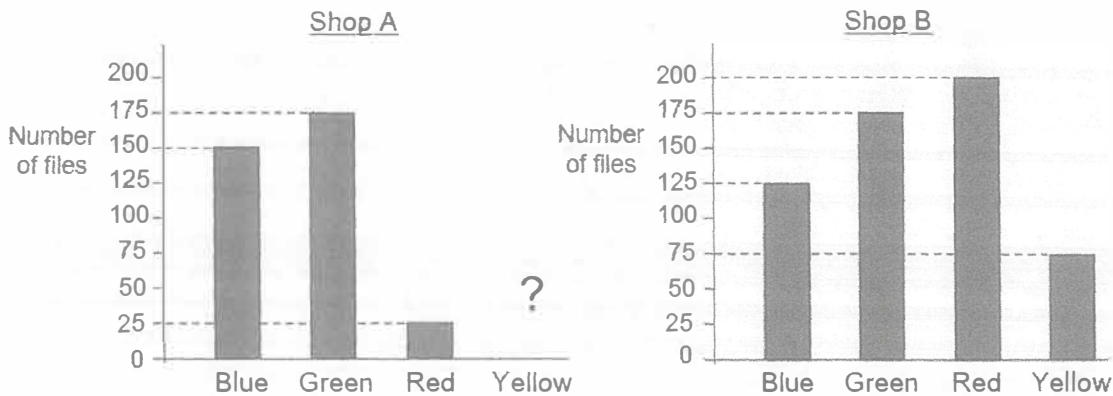
(c) _____ [2]



- 10 Shops A and B sell files of four colours. The bar graphs show the number of files sold by each shop in January.

Do not write in this space

The bar for the number of yellow files sold by Shop A has not been drawn.



- (a) Half of the files sold by Shop A were yellow files. How many yellow files did Shop A sell?
- (b) Which colour(s) of files did Shop A sell more than Shop B?
- (c) In February, Shop B sold 105 more blue files than the number of blue files sold in January. What was the percentage increase in the number of blue files sold by Shop B from January to February?

Ans: (a) _____ [1]

(b) _____ [1]

(c) _____ [2]

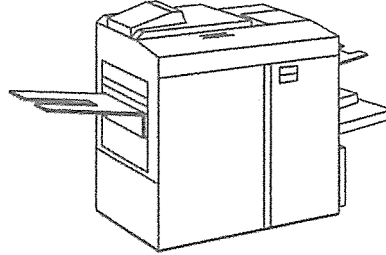
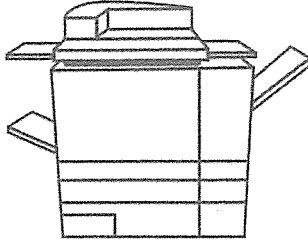


11 The photocopying rates of two machines, P and Q are as shown.

Do not write
in this space

P: 2 pages per second

Q: 7 pages every 5 seconds



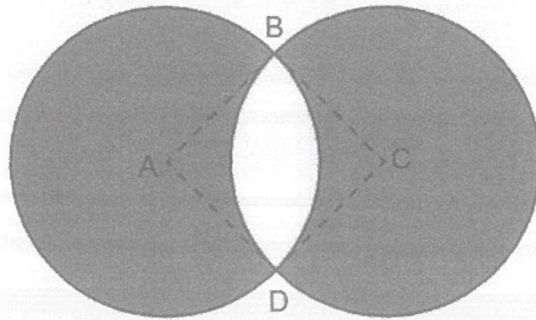
Both machines were used to make a copy of a set of notes which had been divided into Part 1 and Part 2. Machine P took 7 minutes to photocopy Part 1 and Machine Q took 8 minutes to photocopy Part 2.

- (a) How many pages were there altogether in the set of notes?
- (b) Another copy of the same set of notes was made using Machine Q only. How many minutes did Machine Q take?

Ans: (a) _____ [2]

(b) _____ [2]

- 12 The figure is formed by two identical circles with centres at A and C. ABCD is a square and the length of AB is 15 cm.



- (a) Find the perimeter of the unshaded part.
 (b) Find the total area of the shaded parts.

(Take $\pi = 3.14$)

Do not write
in this space

Ans: (a) _____ [1]

(b) _____ [3]



- 13 Mr Lim had blue pens and red pens for sale. He sold 270 blue pens. 25% of the pens sold were red.
- (a) How many blue pens and red pens did Mr Lim sell altogether?
- (b) He sold 40% of his pens. 30% of the pens left unsold were blue. How many red pens did Mr Lim have at first?

Do not write
in this space

Ans: (a) _____ [1]

(b) _____ [3]

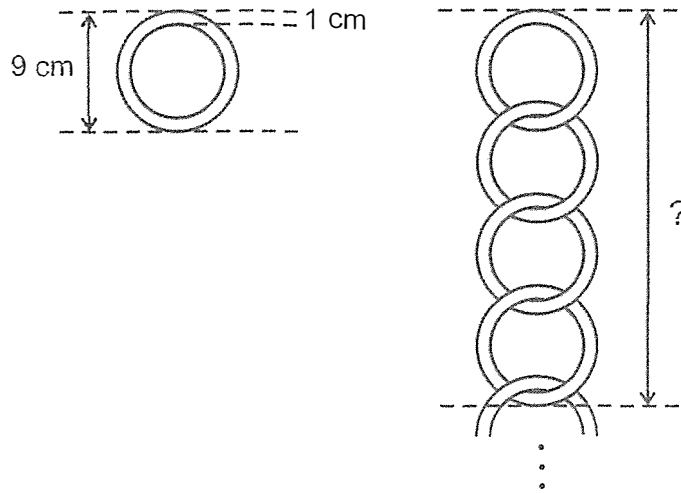
- 14 Andy saved a total of \$108 in coins in his coin box. $\frac{2}{3}$ of all the coins saved were one-dollar coins. There were 3 times as many one-dollar coins as fifty-cent coins. The remaining coins were twenty-cent coins. How many coins did Andy save in his coin box altogether?

Do not write
in this space

Ans: _____ [3]

- 15 Cassie hung some identical rings vertically as shown. The thickness of each ring was 1 cm.

Do not write
in this space



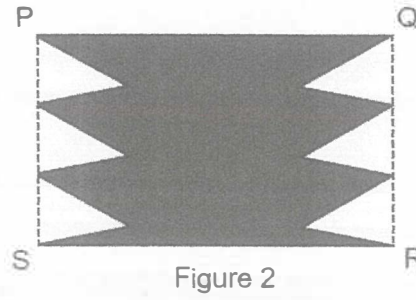

- (a) What was the distance from the top of the 1st ring to the bottom of the 4th ring?
- (b) The distance from the top of the 1st ring to the bottom of the last ring was 198 cm. How many rings did Cassie hang altogether?

Ans: (a) _____ [1]

(b) _____ [2]

- 16 In Figure 1, PQRS is a rectangular piece of paper. After 6 identical triangles are cut out from the paper, the remaining paper is shown in Figure 2. The area of the remaining paper is 279 cm^2 .


Do not write in this space



- (a) What is the area of each triangle that was cut out?
- (b) The perimeter of Figure 2 is 54 cm longer than the perimeter of Figure 1. What is the perimeter of each triangle?

Ans: (a) _____ [2]

(b) _____ [3]



- 17 Mrs Wu spent $\frac{1}{6}$ of her money on a dress and 2 blouses. The dress cost 3 times as much as each blouse. Mrs Wu spent $\frac{3}{4}$ of her remaining money on a watch. She spent \$220.50 more on the watch than on the dress.

- (a) What fraction of Mrs Wu's money was spent on each blouse?
(b) How much money did Mrs Wu have at first?

Do not write
in this space

Ans: (a) _____ [1]

(b) _____ [4]

End of Paper

BLANK PAGE



Copyright Acknowledgements:

The Singapore Examinations and Assessment Board has made every effort to trace copyright holders, but if we have inadvertently overlooked any, we will be pleased to make the necessary arrangements at the first opportunity.